

Year 5 and 6 Home Learning Summer Term

Daily Maths

We use White Rose Maths as our maths curriculum at Hinguar. White Rose Maths are now releasing **daily Home Learning Lessons EVERYDAY** with 3 minute videos and linked worksheets. It is important that, if you are able to access the internet, these are completed at home with year fives and sixes.

<https://whiterosemaths.com/homelearning/>

Reminders:

MyMaths.co.uk and SPAG.com have been set for you and we will be updating these regularly.

Themathsfactor.com is offering free Maths resources.

Corbettmathsprimary.com has daily short maths questions in increasing difficulty from Bronze to Platinum.

9.00am Joe Wicks daily on YouTube (family exercise).

David Walliams has stories to listen to on <https://www.worldofdavidwalliams.com/watch-and-listen/>

You may also know that audible books are being released free at <https://stories.audible.com/start-listen>



comes out...

Can you continue the story?

Please use your year group's writing checklist and Alan Peat sentences (attached).

Sentence challenge

Can you write a sentence containing a relative clause, starting with a noun?

E.G. The man, who had walked thousands of miles, guarded the eggs with his life.

The eggs, which he had found in a cave, were beginning to hatch.

Writing Task - Magical Eggs

He carries them around with him everywhere. People often misunderstand him. People misunderstand the power he possesses. A year ago, he found them deep inside a cave he'd stumbled across in Bulgaria, surrounded by a vast pile of ash from a fire that had long gone out but still gently smoking.

To protect them, he stores them in an egg box, which is a great way of deceiving people, but it's only a matter of time before the truth



Writing Task - Hatched

The crows had been gathering for some time, no doubt displeased by the girl's actions. She could feel the cold, wet slime dripping slowly from her fingertips, but it didn't bother her. Her hands were still, steady, without fear: she had been eagerly awaiting this moment. All she could think about was the creature in front of her, finally escaped from its cage. It had hatched. It was time...

Can you continue the story?

Please use your year group's writing checklist and Alan Peat sentences (attached).

Question time!

What has just hatched from the egg?

Why is the girl unafraid?

Why might the crows be displeased?







What will happen now that it has hatched?

How did the girl end up with the egg in her hands?

How do you think the girl hurt her knees?

How is she feeling?

What does the look in her eyes tell you?

<p>Maths challenges</p> <p>In one year, 78 862 314 Easter eggs were sold in the UK</p> <p>Round this number to the nearest one million.</p> <p>Round this number to the nearest ten thousand.</p> <p>If an extra 2 million eggs had been sold, what would this number be rounded to the nearest one million?</p> 	<p>A survey asked 56 253 people, which type of chocolate egg they preferred. 32 132 people preferred milk chocolate and 16 482 people preferred dark chocolate. The rest preferred white chocolate. How many preferred white chocolate?</p> 	<p>The Easter parade is due to start at 14.20, however, some people have been delayed, and it is running late. It starts 75 minutes after it should have, and lasts for 1 hour 10 minutes. At what time did it finish?</p> 
<p>Lee is organising an egg hunt in the park. He hides 200 eggs.</p> <p>$\frac{1}{5}$ of them are stolen by cheeky squirrels.</p> <p>$\frac{5}{8}$ of the remaining eggs are found by his friends.</p> <ul style="list-style-type: none"> How many eggs are still hidden? 	<p>Melody and Jake are decorating their Easter hats with flowers.</p> <p>For every flower Jake puts on his hat, Melody puts 3 flowers on her hat.</p> <p>Altogether there are 68 flowers on their Easter hats.</p> <ul style="list-style-type: none"> How many flowers are there on Jake's hat? How many flowers are there on Melody's hat? How many more flowers did Melody have than Jake? 	<p>80g of raisins are needed to make 6 hot cross buns.</p> <ul style="list-style-type: none"> How many buns can be made from 1kg of raisins? 
<p>Extension: Provide your child with different numbers to practise with when doing these tasks.</p>		
<p>Creative Challenges</p> <p>Start a vegetable patch in an outdoor space.</p> <p>Create your own collage, drawing or painting in a similar style to a famous artist. E.g. Banksy is a famous modern artist perhaps you can draw in his style on paper or chalks outside (if allowed).</p>	<p>Create an ACTIVE board game to play with your family.</p> 	<p>Help prepare a meal with your family.</p> <p>Write a diary about your time at home, as a record to share with others.</p>

We hope our children and families are keeping safe and well in this unprecedented time. Thank you for your continued support and kind wishes. Together We Achieve!